

Name \_\_\_\_\_

Enrichment

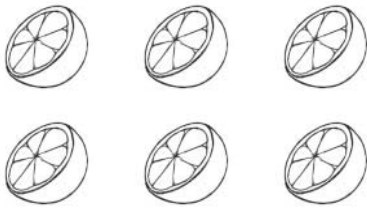
**13-1**

# Fraction Models

Look at the picture.

Write the numbers that make the multiplication equation true.

1.



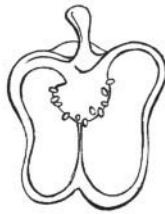
$$\underline{\hspace{2cm}} = \underline{\hspace{2cm}} \times \frac{1}{2}$$

2.



$$\underline{\hspace{2cm}} = 2 \times \underline{\hspace{2cm}}$$

3.



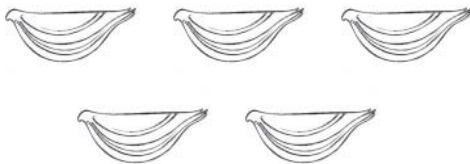
$$\underline{\hspace{2cm}} = \underline{\hspace{2cm}} \times \frac{1}{2}$$

4.




$$\underline{\hspace{2cm}} = \underline{\hspace{2cm}} \times \frac{1}{4}$$

5.



$$\frac{5}{4} = \underline{\hspace{2cm}} \times \underline{\hspace{2cm}}$$

6.



$$\underline{\hspace{2cm}} = 8 \times \frac{1}{3}$$