



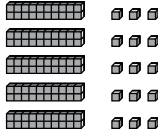



Name _____

Enrichment

5-3

Multiplication Match

Draw lines to match each expression in the first column to the expression or model that represents the same problem in the second column. Then draw a line from the second column to the product in the third column.

1. 2×23		120
2. 3×231	$(6 \times 10) + (6 \times 9)$	452
3. 3×18		117
4. 4×18	$(3 \times 200) + (3 \times 30) + (3 \times 1)$	234
5. 5×24		48
6. 6×39	$(3 \times 30) + (3 \times 9)$	68
7. 4×17		72
8. 4×113	$(4 \times 10) + (4 \times 8)$	115
9. 3×39		114
10. 5×23	$(2 \times 20) + (2 \times 4)$	693
11. 2×24		46
12. 6×19	$(6 \times 30) + (6 \times 9)$	54